



Determine which choice best answers each question.

Answers

- | | | |
|--|---|---|
| <p>1) Which choice best represents length of a bug?
A. 25 millimeters
B. 25 centimeters
C. 25 meters
D. 25 kilometers</p> | <p>2) Which choice best represents length of a football field?
A. 110 millimeters
B. 110 centimeters
C. 110 meters
D. 110 kilometers</p> | <p>3) Which choice best represents length of a paperclip?
A. 25 millimeters
B. 25 centimeters
C. 25 meters
D. 25 kilometers</p> |
| <p>4) Which choice best represents height of a bottle of soda?
A. 152 millimeters
B. 152 centimeters
C. 152 meters
D. 152 kilometers</p> | <p>5) Which choice best represents height of a can of vegetables?
A. 102 millimeters
B. 102 centimeters
C. 102 meters
D. 102 kilometers</p> | <p>6) Which choice best represents length of a river?
A. 24 millimeters
B. 24 centimeters
C. 24 meters
D. 24 kilometers</p> |
| <p>7) Which choice best represents height of a shovel?
A. 1 millimeter
B. 1 centimeter
C. 1 meter
D. 1 kilometer</p> | <p>8) Which choice best represents height of a dog?
A. 61 millimeters
B. 61 centimeters
C. 61 meters
D. 61 kilometers</p> | <p>9) Which choice best represents height of a glue stick?
A. 8 millimeters
B. 8 centimeters
C. 8 meters
D. 8 kilometers</p> |
| <p>10) Which choice best represents height of a door?
A. 2 millimeters
B. 2 centimeters
C. 2 meters
D. 2 kilometers</p> | <p>11) Which choice best represents height of an adult elephant?
A. 4 millimeters
B. 4 centimeters
C. 4 meters
D. 4 kilometers</p> | <p>12) Which choice best represents length of a ruler?
A. 31 millimeters
B. 31 centimeters
C. 31 meters
D. 31 kilometers</p> |
| <p>13) Which choice best represents depth of a swimming pool?
A. 3 millimeters
B. 3 centimeters
C. 3 meters
D. 3 kilometers</p> | <p>14) Which choice best represents length of a school hallway?
A. 30 millimeters
B. 30 centimeters
C. 30 meters
D. 30 kilometers</p> | <p>15) Which choice best represents length of a clothes iron?
A. 18 millimeters
B. 18 centimeters
C. 18 meters
D. 18 kilometers</p> |

1. _____
2. _____
3. _____
4. _____
5. _____
6. _____
7. _____
8. _____
9. _____
10. _____
11. _____
12. _____
13. _____
14. _____
15. _____

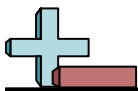


Determine which choice best answers each question.

Answers

- 1) Which choice best represents length of a bug?
A. 25 millimeters
B. 25 centimeters
C. 25 meters
D. 25 kilometers
- 2) Which choice best represents length of a football field?
A. 110 millimeters
B. 110 centimeters
C. 110 meters
D. 110 kilometers
- 3) Which choice best represents length of a paperclip?
A. 25 millimeters
B. 25 centimeters
C. 25 meters
D. 25 kilometers
- 4) Which choice best represents height of a bottle of soda?
A. 152 millimeters
B. 152 centimeters
C. 152 meters
D. 152 kilometers
- 5) Which choice best represents height of a can of vegetables?
A. 102 millimeters
B. 102 centimeters
C. 102 meters
D. 102 kilometers
- 6) Which choice best represents length of a river?
A. 24 millimeters
B. 24 centimeters
C. 24 meters
D. 24 kilometers
- 7) Which choice best represents height of a shovel?
A. 1 millimeter
B. 1 centimeter
C. 1 meter
D. 1 kilometer
- 8) Which choice best represents height of a dog?
A. 61 millimeters
B. 61 centimeters
C. 61 meters
D. 61 kilometers
- 9) Which choice best represents height of a glue stick?
A. 8 millimeters
B. 8 centimeters
C. 8 meters
D. 8 kilometers
- 10) Which choice best represents height of a door?
A. 2 millimeters
B. 2 centimeters
C. 2 meters
D. 2 kilometers
- 11) Which choice best represents height of an adult elephant?
A. 4 millimeters
B. 4 centimeters
C. 4 meters
D. 4 kilometers
- 12) Which choice best represents length of a ruler?
A. 31 millimeters
B. 31 centimeters
C. 31 meters
D. 31 kilometers
- 13) Which choice best represents depth of a swimming pool?
A. 3 millimeters
B. 3 centimeters
C. 3 meters
D. 3 kilometers
- 14) Which choice best represents length of a school hallway?
A. 30 millimeters
B. 30 centimeters
C. 30 meters
D. 30 kilometers
- 15) Which choice best represents length of a clothes iron?
A. 18 millimeters
B. 18 centimeters
C. 18 meters
D. 18 kilometers

1. **A**
2. **C**
3. **A**
4. **A**
5. **A**
6. **D**
7. **C**
8. **B**
9. **B**
10. **C**
11. **C**
12. **B**
13. **C**
14. **C**
15. **B**

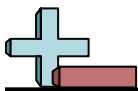


Determine which choice best answers each question.

Answers

- | | | |
|--|---|---|
| <p>1) Which choice best represents height of a school desk?
A. 60 millimeters
B. 60 centimeters
C. 60 meters
D. 60 kilometers</p> | <p>2) Which choice best represents height of a clothes dresser?
A. 1 millimeter
B. 1 centimeter
C. 1 meter
D. 1 kilometer</p> | <p>3) Which choice best represents height of a can of soda?
A. 10 millimeters
B. 10 centimeters
C. 10 meters
D. 10 kilometers</p> |
| <p>4) Which choice best represents height of a mountain?
A. 3 millimeters
B. 3 centimeters
C. 3 meters
D. 3 kilometers</p> | <p>5) Which choice best represents length of a highway?
A. 50 millimeters
B. 50 centimeters
C. 50 meters
D. 50 kilometers</p> | <p>6) Which choice best represents height of a birthday candle?
A. 50 millimeters
B. 50 centimeters
C. 50 meters
D. 50 kilometers</p> |
| <p>7) Which choice best represents length of a key?
A. 50 millimeters
B. 50 centimeters
C. 50 meters
D. 50 kilometers</p> | <p>8) Which choice best represents height of a new pencil?
A. 18 millimeters
B. 18 centimeters
C. 18 meters
D. 18 kilometers</p> | <p>9) Which choice best represents height of a bicycle?
A. 1 millimeter
B. 1 centimeter
C. 1 meter
D. 1 kilometer</p> |
| <p>10) Which choice best represents length of a toothbrush?
A. 18 millimeters
B. 18 centimeters
C. 18 meters
D. 18 kilometers</p> | <p>11) Which choice best represents height of a tree?
A. 5 millimeters
B. 5 centimeters
C. 5 meters
D. 5 kilometers</p> | <p>12) Which choice best represents length of a school bus?
A. 10 millimeters
B. 10 centimeters
C. 10 meters
D. 10 kilometers</p> |
| <p>13) Which choice best represents height of an adult elephant?
A. 4 millimeters
B. 4 centimeters
C. 4 meters
D. 4 kilometers</p> | <p>14) Which choice best represents length of a school hallway?
A. 30 millimeters
B. 30 centimeters
C. 30 meters
D. 30 kilometers</p> | <p>15) Which choice best represents height of a glue stick?
A. 8 millimeters
B. 8 centimeters
C. 8 meters
D. 8 kilometers</p> |

1. _____
2. _____
3. _____
4. _____
5. _____
6. _____
7. _____
8. _____
9. _____
10. _____
11. _____
12. _____
13. _____
14. _____
15. _____

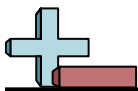


Determine which choice best answers each question.

Answers

- | | | |
|--|---|---|
| <p>1) Which choice best represents height of a school desk?
A. 60 millimeters
B. 60 centimeters
C. 60 meters
D. 60 kilometers</p> | <p>2) Which choice best represents height of a clothes dresser?
A. 1 millimeter
B. 1 centimeter
C. 1 meter
D. 1 kilometer</p> | <p>3) Which choice best represents height of a can of soda?
A. 10 millimeters
B. 10 centimeters
C. 10 meters
D. 10 kilometers</p> |
| <p>4) Which choice best represents height of a mountain?
A. 3 millimeters
B. 3 centimeters
C. 3 meters
D. 3 kilometers</p> | <p>5) Which choice best represents length of a highway?
A. 50 millimeters
B. 50 centimeters
C. 50 meters
D. 50 kilometers</p> | <p>6) Which choice best represents height of a birthday candle?
A. 50 millimeters
B. 50 centimeters
C. 50 meters
D. 50 kilometers</p> |
| <p>7) Which choice best represents length of a key?
A. 50 millimeters
B. 50 centimeters
C. 50 meters
D. 50 kilometers</p> | <p>8) Which choice best represents height of a new pencil?
A. 18 millimeters
B. 18 centimeters
C. 18 meters
D. 18 kilometers</p> | <p>9) Which choice best represents height of a bicycle?
A. 1 millimeter
B. 1 centimeter
C. 1 meter
D. 1 kilometer</p> |
| <p>10) Which choice best represents length of a toothbrush?
A. 18 millimeters
B. 18 centimeters
C. 18 meters
D. 18 kilometers</p> | <p>11) Which choice best represents height of a tree?
A. 5 millimeters
B. 5 centimeters
C. 5 meters
D. 5 kilometers</p> | <p>12) Which choice best represents length of a school bus?
A. 10 millimeters
B. 10 centimeters
C. 10 meters
D. 10 kilometers</p> |
| <p>13) Which choice best represents height of an adult elephant?
A. 4 millimeters
B. 4 centimeters
C. 4 meters
D. 4 kilometers</p> | <p>14) Which choice best represents length of a school hallway?
A. 30 millimeters
B. 30 centimeters
C. 30 meters
D. 30 kilometers</p> | <p>15) Which choice best represents height of a glue stick?
A. 8 millimeters
B. 8 centimeters
C. 8 meters
D. 8 kilometers</p> |

- | | |
|-----|---------------------|
| 1. | <u> B </u> |
| 2. | <u> C </u> |
| 3. | <u> B </u> |
| 4. | <u> D </u> |
| 5. | <u> D </u> |
| 6. | <u> A </u> |
| 7. | <u> A </u> |
| 8. | <u> B </u> |
| 9. | <u> C </u> |
| 10. | <u> B </u> |
| 11. | <u> C </u> |
| 12. | <u> C </u> |
| 13. | <u> C </u> |
| 14. | <u> C </u> |
| 15. | <u> B </u> |



Determine which choice best answers each question.

Answers

1) Which choice best represents height of a bicycle?

- A. 1 millimeter
- B. 1 centimeter
- C. 1 meter
- D. 1 kilometer

2) Which choice best represents length of a school hallway?

- A. 30 millimeters
- B. 30 centimeters
- C. 30 meters
- D. 30 kilometers

3) Which choice best represents width of a forest?

- A. 160 millimeters
- B. 160 centimeters
- C. 160 meters
- D. 160 kilometers

4) Which choice best represents height of a mountain?

- A. 3 millimeters
- B. 3 centimeters
- C. 3 meters
- D. 3 kilometers

5) Which choice best represents height of a bottle of soda?

- A. 152 millimeters
- B. 152 centimeters
- C. 152 meters
- D. 152 kilometers

6) Which choice best represents height of a tree?

- A. 5 millimeters
- B. 5 centimeters
- C. 5 meters
- D. 5 kilometers

7) Which choice best represents height of a dog?

- A. 61 millimeters
- B. 61 centimeters
- C. 61 meters
- D. 61 kilometers

8) Which choice best represents length of a skate board?

- A. 75 millimeters
- B. 75 centimeters
- C. 75 meters
- D. 75 kilometers

9) Which choice best represents height of a lollipop?

- A. 10 millimeters
- B. 10 centimeters
- C. 10 meters
- D. 10 kilometers

10) Which choice best represents depth of the deepest part of the ocean?

- A. 10 millimeters
- B. 10 centimeters
- C. 10 meters
- D. 10 kilometers

11) Which choice best represents height of a car?

- A. 2 millimeters
- B. 2 centimeters
- C. 2 meters
- D. 2 kilometers

12) Which choice best represents height of a ferris wheel?

- A. 25 millimeters
- B. 25 centimeters
- C. 25 meters
- D. 25 kilometers

13) Which choice best represents length of a key?

- A. 50 millimeters
- B. 50 centimeters
- C. 50 meters
- D. 50 kilometers

14) Which choice best represents height of an adult horse?

- A. 2 millimeters
- B. 2 centimeters
- C. 2 meters
- D. 2 kilometers

15) Which choice best represents width of an envelope?

- A. 18 millimeters
- B. 18 centimeters
- C. 18 meters
- D. 18 kilometers

- 1. _____
- 2. _____
- 3. _____
- 4. _____
- 5. _____
- 6. _____
- 7. _____
- 8. _____
- 9. _____
- 10. _____
- 11. _____
- 12. _____
- 13. _____
- 14. _____
- 15. _____

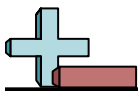


Determine which choice best answers each question.

Answers

- | | | |
|---|--|---|
| <p>1) Which choice best represents height of a bicycle?
A. 1 millimeter
B. 1 centimeter
C. 1 meter
D. 1 kilometer</p> | <p>2) Which choice best represents length of a school hallway?
A. 30 millimeters
B. 30 centimeters
C. 30 meters
D. 30 kilometers</p> | <p>3) Which choice best represents width of a forest?
A. 160 millimeters
B. 160 centimeters
C. 160 meters
D. 160 kilometers</p> |
| <p>4) Which choice best represents height of a mountain?
A. 3 millimeters
B. 3 centimeters
C. 3 meters
D. 3 kilometers</p> | <p>5) Which choice best represents height of a bottle of soda?
A. 152 millimeters
B. 152 centimeters
C. 152 meters
D. 152 kilometers</p> | <p>6) Which choice best represents height of a tree?
A. 5 millimeters
B. 5 centimeters
C. 5 meters
D. 5 kilometers</p> |
| <p>7) Which choice best represents height of a dog?
A. 61 millimeters
B. 61 centimeters
C. 61 meters
D. 61 kilometers</p> | <p>8) Which choice best represents length of a skate board?
A. 75 millimeters
B. 75 centimeters
C. 75 meters
D. 75 kilometers</p> | <p>9) Which choice best represents height of a lollipop?
A. 10 millimeters
B. 10 centimeters
C. 10 meters
D. 10 kilometers</p> |
| <p>10) Which choice best represents depth of the deepest part of the ocean?
A. 10 millimeters
B. 10 centimeters
C. 10 meters
D. 10 kilometers</p> | <p>11) Which choice best represents height of a car?
A. 2 millimeters
B. 2 centimeters
C. 2 meters
D. 2 kilometers</p> | <p>12) Which choice best represents height of a ferris wheel?
A. 25 millimeters
B. 25 centimeters
C. 25 meters
D. 25 kilometers</p> |
| <p>13) Which choice best represents length of a key?
A. 50 millimeters
B. 50 centimeters
C. 50 meters
D. 50 kilometers</p> | <p>14) Which choice best represents height of an adult horse?
A. 2 millimeters
B. 2 centimeters
C. 2 meters
D. 2 kilometers</p> | <p>15) Which choice best represents width of an envelope?
A. 18 millimeters
B. 18 centimeters
C. 18 meters
D. 18 kilometers</p> |

1. **C**
 2. **C**
 3. **D**
 4. **D**
 5. **A**
 6. **C**
 7. **B**
 8. **B**
 9. **B**
 10. **D**
 11. **C**
 12. **C**
 13. **A**
 14. **C**
 15. **B**

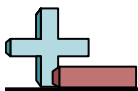


Determine which choice best answers each question.

Answers

- | | | |
|--|---|---|
| <p>1) Which choice best represents height of a door?
A. 2 millimeters
B. 2 centimeters
C. 2 meters
D. 2 kilometers</p> | <p>2) Which choice best represents height of a flag pole?
A. 9 millimeters
B. 9 centimeters
C. 9 meters
D. 9 kilometers</p> | <p>3) Which choice best represents height of a can of vegetables?
A. 102 millimeters
B. 102 centimeters
C. 102 meters
D. 102 kilometers</p> |
| <p>4) Which choice best represents length of a football field?
A. 110 millimeters
B. 110 centimeters
C. 110 meters
D. 110 kilometers</p> | <p>5) Which choice best represents height of a clothes dryer?
A. 1 millimeter
B. 1 centimeter
C. 1 meter
D. 1 kilometer</p> | <p>6) Which choice best represents height of a tree?
A. 5 millimeters
B. 5 centimeters
C. 5 meters
D. 5 kilometers</p> |
| <p>7) Which choice best represents length of a toothbrush?
A. 18 millimeters
B. 18 centimeters
C. 18 meters
D. 18 kilometers</p> | <p>8) Which choice best represents height of an adult horse?
A. 2 millimeters
B. 2 centimeters
C. 2 meters
D. 2 kilometers</p> | <p>9) Which choice best represents length of a dvd?
A. 10 millimeters
B. 10 centimeters
C. 10 meters
D. 10 kilometers</p> |
| <p>10) Which choice best represents height an airplane flies?
A. 10 millimeters
B. 10 centimeters
C. 10 meters
D. 10 kilometers</p> | <p>11) Which choice best represents depth of the deepest part of the ocean?
A. 10 millimeters
B. 10 centimeters
C. 10 meters
D. 10 kilometers</p> | <p>12) Which choice best represents height of an adult elephant?
A. 4 millimeters
B. 4 centimeters
C. 4 meters
D. 4 kilometers</p> |
| <p>13) Which choice best represents height of a piece of popcorn?
A. 25 millimeters
B. 25 centimeters
C. 25 meters
D. 25 kilometers</p> | <p>14) Which choice best represents length of a highway?
A. 50 millimeters
B. 50 centimeters
C. 50 meters
D. 50 kilometers</p> | <p>15) Which choice best represents height of a lollipop?
A. 10 millimeters
B. 10 centimeters
C. 10 meters
D. 10 kilometers</p> |

1. _____
2. _____
3. _____
4. _____
5. _____
6. _____
7. _____
8. _____
9. _____
10. _____
11. _____
12. _____
13. _____
14. _____
15. _____



Determine which choice best answers each question.

Answers

- | | | |
|--|---|---|
| <p>1) Which choice best represents height of a door?
A. 2 millimeters
B. 2 centimeters
C. 2 meters
D. 2 kilometers</p> | <p>2) Which choice best represents height of a flag pole?
A. 9 millimeters
B. 9 centimeters
C. 9 meters
D. 9 kilometers</p> | <p>3) Which choice best represents height of a can of vegetables?
A. 102 millimeters
B. 102 centimeters
C. 102 meters
D. 102 kilometers</p> |
| <p>4) Which choice best represents length of a football field?
A. 110 millimeters
B. 110 centimeters
C. 110 meters
D. 110 kilometers</p> | <p>5) Which choice best represents height of a clothes dryer?
A. 1 millimeter
B. 1 centimeter
C. 1 meter
D. 1 kilometer</p> | <p>6) Which choice best represents height of a tree?
A. 5 millimeters
B. 5 centimeters
C. 5 meters
D. 5 kilometers</p> |
| <p>7) Which choice best represents length of a toothbrush?
A. 18 millimeters
B. 18 centimeters
C. 18 meters
D. 18 kilometers</p> | <p>8) Which choice best represents height of an adult horse?
A. 2 millimeters
B. 2 centimeters
C. 2 meters
D. 2 kilometers</p> | <p>9) Which choice best represents length of a dvd?
A. 10 millimeters
B. 10 centimeters
C. 10 meters
D. 10 kilometers</p> |
| <p>10) Which choice best represents height an airplane flies?
A. 10 millimeters
B. 10 centimeters
C. 10 meters
D. 10 kilometers</p> | <p>11) Which choice best represents depth of the deepest part of the ocean?
A. 10 millimeters
B. 10 centimeters
C. 10 meters
D. 10 kilometers</p> | <p>12) Which choice best represents height of an adult elephant?
A. 4 millimeters
B. 4 centimeters
C. 4 meters
D. 4 kilometers</p> |
| <p>13) Which choice best represents height of a piece of popcorn?
A. 25 millimeters
B. 25 centimeters
C. 25 meters
D. 25 kilometers</p> | <p>14) Which choice best represents length of a highway?
A. 50 millimeters
B. 50 centimeters
C. 50 meters
D. 50 kilometers</p> | <p>15) Which choice best represents height of a lollipop?
A. 10 millimeters
B. 10 centimeters
C. 10 meters
D. 10 kilometers</p> |

- | | |
|-----|---------------------|
| 1. | <u> C </u> |
| 2. | <u> C </u> |
| 3. | <u> A </u> |
| 4. | <u> C </u> |
| 5. | <u> C </u> |
| 6. | <u> C </u> |
| 7. | <u> B </u> |
| 8. | <u> C </u> |
| 9. | <u> B </u> |
| 10. | <u> D </u> |
| 11. | <u> D </u> |
| 12. | <u> C </u> |
| 13. | <u> A </u> |
| 14. | <u> D </u> |
| 15. | <u> B </u> |



Determine which choice best answers each question.

Answers

1) Which choice best represents height of a school desk?
 A. 60 millimeters
 B. 60 centimeters
 C. 60 meters
 D. 60 kilometers

2) Which choice best represents height of a clothes dryer?
 A. 1 millimeter
 B. 1 centimeter
 C. 1 meter
 D. 1 kilometer

3) Which choice best represents height of a tree?
 A. 5 millimeters
 B. 5 centimeters
 C. 5 meters
 D. 5 kilometers

4) Which choice best represents height of a new pencil?
 A. 18 millimeters
 B. 18 centimeters
 C. 18 meters
 D. 18 kilometers

5) Which choice best represents height of a birthday candle?
 A. 50 millimeters
 B. 50 centimeters
 C. 50 meters
 D. 50 kilometers

6) Which choice best represents width of a piece of bread?
 A. 10 millimeters
 B. 10 centimeters
 C. 10 meters
 D. 10 kilometers

7) Which choice best represents length of a clothes iron?
 A. 18 millimeters
 B. 18 centimeters
 C. 18 meters
 D. 18 kilometers

8) Which choice best represents length of a school hallway?
 A. 30 millimeters
 B. 30 centimeters
 C. 30 meters
 D. 30 kilometers

9) Which choice best represents height of a box of cereal?
 A. 30 millimeters
 B. 30 centimeters
 C. 30 meters
 D. 30 kilometers

10) Which choice best represents length of a paperclip?
 A. 25 millimeters
 B. 25 centimeters
 C. 25 meters
 D. 25 kilometers

11) Which choice best represents height of a vacuum cleaner?
 A. 1 millimeter
 B. 1 centimeter
 C. 1 meter
 D. 1 kilometer

12) Which choice best represents height of a cereal bowl?
 A. 10 millimeters
 B. 10 centimeters
 C. 10 meters
 D. 10 kilometers

13) Which choice best represents height of an apple?
 A. 10 millimeters
 B. 10 centimeters
 C. 10 meters
 D. 10 kilometers

14) Which choice best represents depth of a swimming pool?
 A. 3 millimeters
 B. 3 centimeters
 C. 3 meters
 D. 3 kilometers

15) Which choice best represents height of a 2 story home?
 A. 12 millimeters
 B. 12 centimeters
 C. 12 meters
 D. 12 kilometers

- 1. _____
- 2. _____
- 3. _____
- 4. _____
- 5. _____
- 6. _____
- 7. _____
- 8. _____
- 9. _____
- 10. _____
- 11. _____
- 12. _____
- 13. _____
- 14. _____
- 15. _____

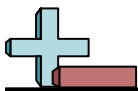


Determine which choice best answers each question.

Answers

- | | | |
|--|---|---|
| <p>1) Which choice best represents height of a school desk?
A. 60 millimeters
B. 60 centimeters
C. 60 meters
D. 60 kilometers</p> | <p>2) Which choice best represents height of a clothes dryer?
A. 1 millimeter
B. 1 centimeter
C. 1 meter
D. 1 kilometer</p> | <p>3) Which choice best represents height of a tree?
A. 5 millimeters
B. 5 centimeters
C. 5 meters
D. 5 kilometers</p> |
| <p>4) Which choice best represents height of a new pencil?
A. 18 millimeters
B. 18 centimeters
C. 18 meters
D. 18 kilometers</p> | <p>5) Which choice best represents height of a birthday candle?
A. 50 millimeters
B. 50 centimeters
C. 50 meters
D. 50 kilometers</p> | <p>6) Which choice best represents width of a piece of bread?
A. 10 millimeters
B. 10 centimeters
C. 10 meters
D. 10 kilometers</p> |
| <p>7) Which choice best represents length of a clothes iron?
A. 18 millimeters
B. 18 centimeters
C. 18 meters
D. 18 kilometers</p> | <p>8) Which choice best represents length of a school hallway?
A. 30 millimeters
B. 30 centimeters
C. 30 meters
D. 30 kilometers</p> | <p>9) Which choice best represents height of a box of cereal?
A. 30 millimeters
B. 30 centimeters
C. 30 meters
D. 30 kilometers</p> |
| <p>10) Which choice best represents length of a paperclip?
A. 25 millimeters
B. 25 centimeters
C. 25 meters
D. 25 kilometers</p> | <p>11) Which choice best represents height of a vacuum cleaner?
A. 1 millimeter
B. 1 centimeter
C. 1 meter
D. 1 kilometer</p> | <p>12) Which choice best represents height of a cereal bowl?
A. 10 millimeters
B. 10 centimeters
C. 10 meters
D. 10 kilometers</p> |
| <p>13) Which choice best represents height of an apple?
A. 10 millimeters
B. 10 centimeters
C. 10 meters
D. 10 kilometers</p> | <p>14) Which choice best represents depth of a swimming pool?
A. 3 millimeters
B. 3 centimeters
C. 3 meters
D. 3 kilometers</p> | <p>15) Which choice best represents height of a 2 story home?
A. 12 millimeters
B. 12 centimeters
C. 12 meters
D. 12 kilometers</p> |

- | | |
|-----|---------------------|
| 1. | <u> B </u> |
| 2. | <u> C </u> |
| 3. | <u> C </u> |
| 4. | <u> B </u> |
| 5. | <u> A </u> |
| 6. | <u> B </u> |
| 7. | <u> B </u> |
| 8. | <u> C </u> |
| 9. | <u> B </u> |
| 10. | <u> A </u> |
| 11. | <u> C </u> |
| 12. | <u> B </u> |
| 13. | <u> B </u> |
| 14. | <u> C </u> |
| 15. | <u> C </u> |



Determine which choice best answers each question.

Answers

- 1) Which choice best represents height of a dog?
 A. 61 millimeters
 B. 61 centimeters
 C. 61 meters
 D. 61 kilometers

- 2) Which choice best represents width of a forest?
 A. 160 millimeters
 B. 160 centimeters
 C. 160 meters
 D. 160 kilometers

- 3) Which choice best represents length of a clothes iron?
 A. 18 millimeters
 B. 18 centimeters
 C. 18 meters
 D. 18 kilometers

- 4) Which choice best represents height of a clothes dryer?
 A. 1 millimeter
 B. 1 centimeter
 C. 1 meter
 D. 1 kilometer

- 5) Which choice best represents width of a sheet of paper?
 A. 20 millimeters
 B. 20 centimeters
 C. 20 meters
 D. 20 kilometers

- 6) Which choice best represents height of an apple?
 A. 10 millimeters
 B. 10 centimeters
 C. 10 meters
 D. 10 kilometers

- 7) Which choice best represents height of a refrigerator?
 A. 2 millimeters
 B. 2 centimeters
 C. 2 meters
 D. 2 kilometers

- 8) Which choice best represents length of a bug?
 A. 25 millimeters
 B. 25 centimeters
 C. 25 meters
 D. 25 kilometers

- 9) Which choice best represents height of a can of soda?
 A. 10 millimeters
 B. 10 centimeters
 C. 10 meters
 D. 10 kilometers

- 10) Which choice best represents length of a school bus?
 A. 10 millimeters
 B. 10 centimeters
 C. 10 meters
 D. 10 kilometers

- 11) Which choice best represents height of a birthday candle?
 A. 50 millimeters
 B. 50 centimeters
 C. 50 meters
 D. 50 kilometers

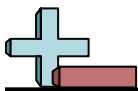
- 12) Which choice best represents depth of the deepest part of the ocean?
 A. 10 millimeters
 B. 10 centimeters
 C. 10 meters
 D. 10 kilometers

- 13) Which choice best represents height of a sheet of paper?
 A. 28 millimeters
 B. 28 centimeters
 C. 28 meters
 D. 28 kilometers

- 14) Which choice best represents length of a paperclip?
 A. 25 millimeters
 B. 25 centimeters
 C. 25 meters
 D. 25 kilometers

- 15) Which choice best represents height of a piece of popcorn?
 A. 25 millimeters
 B. 25 centimeters
 C. 25 meters
 D. 25 kilometers

1. _____
 2. _____
 3. _____
 4. _____
 5. _____
 6. _____
 7. _____
 8. _____
 9. _____
 10. _____
 11. _____
 12. _____
 13. _____
 14. _____
 15. _____

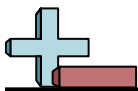


Determine which choice best answers each question.

Answers

- 1) Which choice best represents height of a dog?
A. 61 millimeters
B. 61 centimeters
C. 61 meters
D. 61 kilometers
- 2) Which choice best represents width of a forest?
A. 160 millimeters
B. 160 centimeters
C. 160 meters
D. 160 kilometers
- 3) Which choice best represents length of a clothes iron?
A. 18 millimeters
B. 18 centimeters
C. 18 meters
D. 18 kilometers
- 4) Which choice best represents height of a clothes dryer?
A. 1 millimeter
B. 1 centimeter
C. 1 meter
D. 1 kilometer
- 5) Which choice best represents width of a sheet of paper?
A. 20 millimeters
B. 20 centimeters
C. 20 meters
D. 20 kilometers
- 6) Which choice best represents height of an apple?
A. 10 millimeters
B. 10 centimeters
C. 10 meters
D. 10 kilometers
- 7) Which choice best represents height of a refrigerator?
A. 2 millimeters
B. 2 centimeters
C. 2 meters
D. 2 kilometers
- 8) Which choice best represents length of a bug?
A. 25 millimeters
B. 25 centimeters
C. 25 meters
D. 25 kilometers
- 9) Which choice best represents height of a can of soda?
A. 10 millimeters
B. 10 centimeters
C. 10 meters
D. 10 kilometers
- 10) Which choice best represents length of a school bus?
A. 10 millimeters
B. 10 centimeters
C. 10 meters
D. 10 kilometers
- 11) Which choice best represents height of a birthday candle?
A. 50 millimeters
B. 50 centimeters
C. 50 meters
D. 50 kilometers
- 12) Which choice best represents depth of the deepest part of the ocean?
A. 10 millimeters
B. 10 centimeters
C. 10 meters
D. 10 kilometers
- 13) Which choice best represents height of a sheet of paper?
A. 28 millimeters
B. 28 centimeters
C. 28 meters
D. 28 kilometers
- 14) Which choice best represents length of a paperclip?
A. 25 millimeters
B. 25 centimeters
C. 25 meters
D. 25 kilometers
- 15) Which choice best represents height of a piece of popcorn?
A. 25 millimeters
B. 25 centimeters
C. 25 meters
D. 25 kilometers

- 1. **B**
- 2. **D**
- 3. **B**
- 4. **C**
- 5. **B**
- 6. **B**
- 7. **C**
- 8. **A**
- 9. **B**
- 10. **C**
- 11. **A**
- 12. **D**
- 13. **B**
- 14. **A**
- 15. **A**



Determine which choice best answers each question.

Answers

1) Which choice best represents length of a ruler?

- A. 31 millimeters
- B. 31 centimeters
- C. 31 meters
- D. 31 kilometers

2) Which choice best represents height of a dog?

- A. 61 millimeters
- B. 61 centimeters
- C. 61 meters
- D. 61 kilometers

3) Which choice best represents length of a loaf of bread?

- A. 31 millimeters
- B. 31 centimeters
- C. 31 meters
- D. 31 kilometers

4) Which choice best represents length of a baseball cap?

- A. 30 millimeters
- B. 30 centimeters
- C. 30 meters
- D. 30 kilometers

5) Which choice best represents height of a tree?

- A. 5 millimeters
- B. 5 centimeters
- C. 5 meters
- D. 5 kilometers

6) Which choice best represents height of a lollipop?

- A. 10 millimeters
- B. 10 centimeters
- C. 10 meters
- D. 10 kilometers

7) Which choice best represents height of an adult horse?

- A. 2 millimeters
- B. 2 centimeters
- C. 2 meters
- D. 2 kilometers

8) Which choice best represents length of a skateboard?

- A. 75 millimeters
- B. 75 centimeters
- C. 75 meters
- D. 75 kilometers

9) Which choice best represents length of a pen?

- A. 13 millimeters
- B. 13 centimeters
- C. 13 meters
- D. 13 kilometers

10) Which choice best represents length of a football?

- A. 28 millimeters
- B. 28 centimeters
- C. 28 meters
- D. 28 kilometers

11) Which choice best represents length of a highway?

- A. 50 millimeters
- B. 50 centimeters
- C. 50 meters
- D. 50 kilometers

12) Which choice best represents length of a school bus?

- A. 10 millimeters
- B. 10 centimeters
- C. 10 meters
- D. 10 kilometers

13) Which choice best represents length of a river?

- A. 24 millimeters
- B. 24 centimeters
- C. 24 meters
- D. 24 kilometers

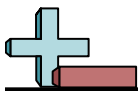
14) Which choice best represents height of a clothes dryer?

- A. 1 millimeter
- B. 1 centimeter
- C. 1 meter
- D. 1 kilometer

15) Which choice best represents width of a piece of bread?

- A. 10 millimeters
- B. 10 centimeters
- C. 10 meters
- D. 10 kilometers

- 1. _____
- 2. _____
- 3. _____
- 4. _____
- 5. _____
- 6. _____
- 7. _____
- 8. _____
- 9. _____
- 10. _____
- 11. _____
- 12. _____
- 13. _____
- 14. _____
- 15. _____

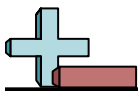


Determine which choice best answers each question.

Answers

- | | | |
|--|--|--|
| <p>1) Which choice best represents length of a ruler?
A. 31 millimeters
B. 31 centimeters
C. 31 meters
D. 31 kilometers</p> | <p>2) Which choice best represents height of a dog?
A. 61 millimeters
B. 61 centimeters
C. 61 meters
D. 61 kilometers</p> | <p>3) Which choice best represents length of a loaf of bread?
A. 31 millimeters
B. 31 centimeters
C. 31 meters
D. 31 kilometers</p> |
| <p>4) Which choice best represents length of a baseball cap?
A. 30 millimeters
B. 30 centimeters
C. 30 meters
D. 30 kilometers</p> | <p>5) Which choice best represents height of a tree?
A. 5 millimeters
B. 5 centimeters
C. 5 meters
D. 5 kilometers</p> | <p>6) Which choice best represents height of a lollipop?
A. 10 millimeters
B. 10 centimeters
C. 10 meters
D. 10 kilometers</p> |
| <p>7) Which choice best represents height of an adult horse?
A. 2 millimeters
B. 2 centimeters
C. 2 meters
D. 2 kilometers</p> | <p>8) Which choice best represents length of a skateboard?
A. 75 millimeters
B. 75 centimeters
C. 75 meters
D. 75 kilometers</p> | <p>9) Which choice best represents length of a pen?
A. 13 millimeters
B. 13 centimeters
C. 13 meters
D. 13 kilometers</p> |
| <p>10) Which choice best represents length of a football?
A. 28 millimeters
B. 28 centimeters
C. 28 meters
D. 28 kilometers</p> | <p>11) Which choice best represents length of a highway?
A. 50 millimeters
B. 50 centimeters
C. 50 meters
D. 50 kilometers</p> | <p>12) Which choice best represents length of a school bus?
A. 10 millimeters
B. 10 centimeters
C. 10 meters
D. 10 kilometers</p> |
| <p>13) Which choice best represents length of a river?
A. 24 millimeters
B. 24 centimeters
C. 24 meters
D. 24 kilometers</p> | <p>14) Which choice best represents height of a clothes dryer?
A. 1 millimeter
B. 1 centimeter
C. 1 meter
D. 1 kilometer</p> | <p>15) Which choice best represents width of a piece of bread?
A. 10 millimeters
B. 10 centimeters
C. 10 meters
D. 10 kilometers</p> |

- | | |
|-----|-------------------------|
| 1. | <u> B </u> |
| 2. | <u> B </u> |
| 3. | <u> B </u> |
| 4. | <u> B </u> |
| 5. | <u> C </u> |
| 6. | <u> B </u> |
| 7. | <u> C </u> |
| 8. | <u> B </u> |
| 9. | <u> B </u> |
| 10. | <u> B </u> |
| 11. | <u> D </u> |
| 12. | <u> C </u> |
| 13. | <u> D </u> |
| 14. | <u> C </u> |
| 15. | <u> B </u> |



Determine which choice best answers each question.

Answers

- 1) Which choice best represents length of a ruler?
A. 31 millimeters
B. 31 centimeters
C. 31 meters
D. 31 kilometers

- 2) Which choice best represents width of an envelope?
A. 18 millimeters
B. 18 centimeters
C. 18 meters
D. 18 kilometers

- 3) Which choice best represents height of a dog?
A. 61 millimeters
B. 61 centimeters
C. 61 meters
D. 61 kilometers

- 4) Which choice best represents length of a football field?
A. 110 millimeters
B. 110 centimeters
C. 110 meters
D. 110 kilometers

- 5) Which choice best represents height an airplane flies?
A. 10 millimeters
B. 10 centimeters
C. 10 meters
D. 10 kilometers

- 6) Which choice best represents height of a clothes dresser?
A. 1 millimeter
B. 1 centimeter
C. 1 meter
D. 1 kilometer

- 7) Which choice best represents length of a hammer?
A. 41 millimeters
B. 41 centimeters
C. 41 meters
D. 41 kilometers

- 8) Which choice best represents height of a recliner?
A. 1 millimeter
B. 1 centimeter
C. 1 meter
D. 1 kilometer

- 9) Which choice best represents height of an apple?
A. 10 millimeters
B. 10 centimeters
C. 10 meters
D. 10 kilometers

- 10) Which choice best represents width of a forest?
A. 160 millimeters
B. 160 centimeters
C. 160 meters
D. 160 kilometers

- 11) Which choice best represents height of a new pencil?
A. 18 millimeters
B. 18 centimeters
C. 18 meters
D. 18 kilometers

- 12) Which choice best represents height of a shovel?
A. 1 millimeter
B. 1 centimeter
C. 1 meter
D. 1 kilometer

- 13) Which choice best represents length of a skate board?
A. 75 millimeters
B. 75 centimeters
C. 75 meters
D. 75 kilometers

- 14) Which choice best represents length of a loaf of bread?
A. 31 millimeters
B. 31 centimeters
C. 31 meters
D. 31 kilometers

- 15) Which choice best represents length of a dvd?
A. 10 millimeters
B. 10 centimeters
C. 10 meters
D. 10 kilometers

- 1. _____
- 2. _____
- 3. _____
- 4. _____
- 5. _____
- 6. _____
- 7. _____
- 8. _____
- 9. _____
- 10. _____
- 11. _____
- 12. _____
- 13. _____
- 14. _____
- 15. _____



Determine which choice best answers each question.

Answers

- 1) Which choice best represents length of a ruler?
A. 31 millimeters
B. 31 centimeters
C. 31 meters
D. 31 kilometers
- 2) Which choice best represents width of an envelope?
A. 18 millimeters
B. 18 centimeters
C. 18 meters
D. 18 kilometers
- 3) Which choice best represents height of a dog?
A. 61 millimeters
B. 61 centimeters
C. 61 meters
D. 61 kilometers
- 4) Which choice best represents length of a football field?
A. 110 millimeters
B. 110 centimeters
C. 110 meters
D. 110 kilometers
- 5) Which choice best represents height an airplane flies?
A. 10 millimeters
B. 10 centimeters
C. 10 meters
D. 10 kilometers
- 6) Which choice best represents height of a clothes dresser?
A. 1 millimeter
B. 1 centimeter
C. 1 meter
D. 1 kilometer
- 7) Which choice best represents length of a hammer?
A. 41 millimeters
B. 41 centimeters
C. 41 meters
D. 41 kilometers
- 8) Which choice best represents height of a recliner?
A. 1 millimeter
B. 1 centimeter
C. 1 meter
D. 1 kilometer
- 9) Which choice best represents height of an apple?
A. 10 millimeters
B. 10 centimeters
C. 10 meters
D. 10 kilometers
- 10) Which choice best represents width of a forest?
A. 160 millimeters
B. 160 centimeters
C. 160 meters
D. 160 kilometers
- 11) Which choice best represents height of a new pencil?
A. 18 millimeters
B. 18 centimeters
C. 18 meters
D. 18 kilometers
- 12) Which choice best represents height of a shovel?
A. 1 millimeter
B. 1 centimeter
C. 1 meter
D. 1 kilometer
- 13) Which choice best represents length of a skate board?
A. 75 millimeters
B. 75 centimeters
C. 75 meters
D. 75 kilometers
- 14) Which choice best represents length of a loaf of bread?
A. 31 millimeters
B. 31 centimeters
C. 31 meters
D. 31 kilometers
- 15) Which choice best represents length of a dvd?
A. 10 millimeters
B. 10 centimeters
C. 10 meters
D. 10 kilometers

- 1. **B**
- 2. **B**
- 3. **B**
- 4. **C**
- 5. **D**
- 6. **C**
- 7. **B**
- 8. **C**
- 9. **B**
- 10. **D**
- 11. **B**
- 12. **C**
- 13. **B**
- 14. **B**
- 15. **B**



Determine which choice best answers each question.

Answers

1) Which choice best represents height of a flag pole?

- A. 9 millimeters
- B. 9 centimeters
- C. 9 meters
- D. 9 kilometers

2) Which choice best represents length of a loaf of bread?

- A. 31 millimeters
- B. 31 centimeters
- C. 31 meters
- D. 31 kilometers

3) Which choice best represents height of an apple?

- A. 10 millimeters
- B. 10 centimeters
- C. 10 meters
- D. 10 kilometers

4) Which choice best represents height of a birthday candle?

- A. 50 millimeters
- B. 50 centimeters
- C. 50 meters
- D. 50 kilometers

5) Which choice best represents height of a clothes dresser?

- A. 1 millimeter
- B. 1 centimeter
- C. 1 meter
- D. 1 kilometer

6) Which choice best represents height of a sheet of paper?

- A. 28 millimeters
- B. 28 centimeters
- C. 28 meters
- D. 28 kilometers

7) Which choice best represents height of a dog?

- A. 61 millimeters
- B. 61 centimeters
- C. 61 meters
- D. 61 kilometers

8) Which choice best represents height of a shovel?

- A. 1 millimeter
- B. 1 centimeter
- C. 1 meter
- D. 1 kilometer

9) Which choice best represents length of a football field?

- A. 110 millimeters
- B. 110 centimeters
- C. 110 meters
- D. 110 kilometers

10) Which choice best represents height of a clothes dryer?

- A. 1 millimeter
- B. 1 centimeter
- C. 1 meter
- D. 1 kilometer

11) Which choice best represents length of a clothes iron?

- A. 18 millimeters
- B. 18 centimeters
- C. 18 meters
- D. 18 kilometers

12) Which choice best represents length of a dvd?

- A. 10 millimeters
- B. 10 centimeters
- C. 10 meters
- D. 10 kilometers

13) Which choice best represents length of a school hallway?

- A. 30 millimeters
- B. 30 centimeters
- C. 30 meters
- D. 30 kilometers

14) Which choice best represents height of a recliner?

- A. 1 millimeter
- B. 1 centimeter
- C. 1 meter
- D. 1 kilometer

15) Which choice best represents height of a car?

- A. 2 millimeters
- B. 2 centimeters
- C. 2 meters
- D. 2 kilometers

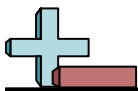
- 1. _____
- 2. _____
- 3. _____
- 4. _____
- 5. _____
- 6. _____
- 7. _____
- 8. _____
- 9. _____
- 10. _____
- 11. _____
- 12. _____
- 13. _____
- 14. _____
- 15. _____



Determine which choice best answers each question.

Answers

- | | | | |
|---|---|--|---|
| <p>1) Which choice best represents height of a flag pole?
A. 9 millimeters
B. 9 centimeters
C. 9 meters
D. 9 kilometers</p> | <p>2) Which choice best represents length of a loaf of bread?
A. 31 millimeters
B. 31 centimeters
C. 31 meters
D. 31 kilometers</p> | <p>3) Which choice best represents height of an apple?
A. 10 millimeters
B. 10 centimeters
C. 10 meters
D. 10 kilometers</p> | <p>1. <u> C </u></p> |
| <p>4) Which choice best represents height of a birthday candle?
A. 50 millimeters
B. 50 centimeters
C. 50 meters
D. 50 kilometers</p> | <p>5) Which choice best represents height of a clothes dresser?
A. 1 millimeter
B. 1 centimeter
C. 1 meter
D. 1 kilometer</p> | <p>6) Which choice best represents height of a sheet of paper?
A. 28 millimeters
B. 28 centimeters
C. 28 meters
D. 28 kilometers</p> | <p>2. <u> B </u></p> <p>3. <u> B </u></p> <p>4. <u> A </u></p> <p>5. <u> C </u></p> |
| <p>7) Which choice best represents height of a dog?
A. 61 millimeters
B. 61 centimeters
C. 61 meters
D. 61 kilometers</p> | <p>8) Which choice best represents height of a shovel?
A. 1 millimeter
B. 1 centimeter
C. 1 meter
D. 1 kilometer</p> | <p>9) Which choice best represents length of a football field?
A. 110 millimeters
B. 110 centimeters
C. 110 meters
D. 110 kilometers</p> | <p>6. <u> B </u></p> <p>7. <u> B </u></p> <p>8. <u> C </u></p> <p>9. <u> C </u></p> |
| <p>10) Which choice best represents height of a clothes dryer?
A. 1 millimeter
B. 1 centimeter
C. 1 meter
D. 1 kilometer</p> | <p>11) Which choice best represents length of a clothes iron?
A. 18 millimeters
B. 18 centimeters
C. 18 meters
D. 18 kilometers</p> | <p>12) Which choice best represents length of a dvd?
A. 10 millimeters
B. 10 centimeters
C. 10 meters
D. 10 kilometers</p> | <p>10. <u> C </u></p> <p>11. <u> B </u></p> <p>12. <u> B </u></p> <p>13. <u> C </u></p> |
| <p>13) Which choice best represents length of a school hallway?
A. 30 millimeters
B. 30 centimeters
C. 30 meters
D. 30 kilometers</p> | <p>14) Which choice best represents height of a recliner?
A. 1 millimeter
B. 1 centimeter
C. 1 meter
D. 1 kilometer</p> | <p>15) Which choice best represents height of a car?
A. 2 millimeters
B. 2 centimeters
C. 2 meters
D. 2 kilometers</p> | <p>14. <u> C </u></p> <p>15. <u> C </u></p> |



Determine which choice best answers each question.

Answers

1) Which choice best represents height of an apple?

- A. 10 millimeters
- B. 10 centimeters
- C. 10 meters
- D. 10 kilometers

2) Which choice best represents width of a piece of bread?

- A. 10 millimeters
- B. 10 centimeters
- C. 10 meters
- D. 10 kilometers

3) Which choice best represents height of a can of vegetables?

- A. 102 millimeters
- B. 102 centimeters
- C. 102 meters
- D. 102 kilometers

4) Which choice best represents height of a tennis ball?

- A. 8 millimeters
- B. 8 centimeters
- C. 8 meters
- D. 8 kilometers

5) Which choice best represents length of a river?

- A. 24 millimeters
- B. 24 centimeters
- C. 24 meters
- D. 24 kilometers

6) Which choice best represents height of a ferris wheel?

- A. 25 millimeters
- B. 25 centimeters
- C. 25 meters
- D. 25 kilometers

7) Which choice best represents length of a key?

- A. 50 millimeters
- B. 50 centimeters
- C. 50 meters
- D. 50 kilometers

8) Which choice best represents height of a box of cereal?

- A. 30 millimeters
- B. 30 centimeters
- C. 30 meters
- D. 30 kilometers

9) Which choice best represents length of a hammer?

- A. 41 millimeters
- B. 41 centimeters
- C. 41 meters
- D. 41 kilometers

10) Which choice best represents length of a football field?

- A. 110 millimeters
- B. 110 centimeters
- C. 110 meters
- D. 110 kilometers

11) Which choice best represents length of a school hallway?

- A. 30 millimeters
- B. 30 centimeters
- C. 30 meters
- D. 30 kilometers

12) Which choice best represents length of a toothbrush?

- A. 18 millimeters
- B. 18 centimeters
- C. 18 meters
- D. 18 kilometers

13) Which choice best represents length of a paperclip?

- A. 25 millimeters
- B. 25 centimeters
- C. 25 meters
- D. 25 kilometers

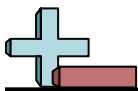
14) Which choice best represents length of a clothes iron?

- A. 18 millimeters
- B. 18 centimeters
- C. 18 meters
- D. 18 kilometers

15) Which choice best represents height of a birthday candle?

- A. 50 millimeters
- B. 50 centimeters
- C. 50 meters
- D. 50 kilometers

- 1. _____
- 2. _____
- 3. _____
- 4. _____
- 5. _____
- 6. _____
- 7. _____
- 8. _____
- 9. _____
- 10. _____
- 11. _____
- 12. _____
- 13. _____
- 14. _____
- 15. _____



Determine which choice best answers each question.

Answers

- | | | |
|---|---|---|
| <p>1) Which choice best represents height of an apple?
A. 10 millimeters
B. 10 centimeters
C. 10 meters
D. 10 kilometers</p> | <p>2) Which choice best represents width of a piece of bread?
A. 10 millimeters
B. 10 centimeters
C. 10 meters
D. 10 kilometers</p> | <p>3) Which choice best represents height of a can of vegetables?
A. 102 millimeters
B. 102 centimeters
C. 102 meters
D. 102 kilometers</p> |
| <p>4) Which choice best represents height of a tennis ball?
A. 8 millimeters
B. 8 centimeters
C. 8 meters
D. 8 kilometers</p> | <p>5) Which choice best represents length of a river?
A. 24 millimeters
B. 24 centimeters
C. 24 meters
D. 24 kilometers</p> | <p>6) Which choice best represents height of a ferris wheel?
A. 25 millimeters
B. 25 centimeters
C. 25 meters
D. 25 kilometers</p> |
| <p>7) Which choice best represents length of a key?
A. 50 millimeters
B. 50 centimeters
C. 50 meters
D. 50 kilometers</p> | <p>8) Which choice best represents height of a box of cereal?
A. 30 millimeters
B. 30 centimeters
C. 30 meters
D. 30 kilometers</p> | <p>9) Which choice best represents length of a hammer?
A. 41 millimeters
B. 41 centimeters
C. 41 meters
D. 41 kilometers</p> |
| <p>10) Which choice best represents length of a football field?
A. 110 millimeters
B. 110 centimeters
C. 110 meters
D. 110 kilometers</p> | <p>11) Which choice best represents length of a school hallway?
A. 30 millimeters
B. 30 centimeters
C. 30 meters
D. 30 kilometers</p> | <p>12) Which choice best represents length of a toothbrush?
A. 18 millimeters
B. 18 centimeters
C. 18 meters
D. 18 kilometers</p> |
| <p>13) Which choice best represents length of a paperclip?
A. 25 millimeters
B. 25 centimeters
C. 25 meters
D. 25 kilometers</p> | <p>14) Which choice best represents length of a clothes iron?
A. 18 millimeters
B. 18 centimeters
C. 18 meters
D. 18 kilometers</p> | <p>15) Which choice best represents height of a birthday candle?
A. 50 millimeters
B. 50 centimeters
C. 50 meters
D. 50 kilometers</p> |

1. **B**
 2. **B**
 3. **A**
 4. **B**
 5. **D**
 6. **C**
 7. **A**
 8. **B**
 9. **B**
 10. **C**
 11. **C**
 12. **B**
 13. **A**
 14. **B**
 15. **A**